

Name: \_\_\_\_\_

## Coordinate Grid

Give the coordinates for the following points.

1. C \_\_\_\_\_

2. H \_\_\_\_\_

3. B \_\_\_\_\_

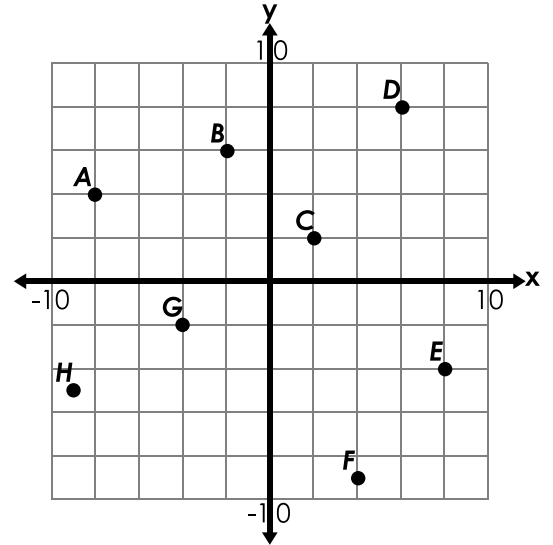
4. E \_\_\_\_\_

5. G \_\_\_\_\_

6. D \_\_\_\_\_

7. A \_\_\_\_\_

8. F \_\_\_\_\_



# Preview

Please log in to download the printable version of this worksheet.

15. (18, 10) \_\_\_\_\_

16. (-14, -2) \_\_\_\_\_

17. (-8, 35) \_\_\_\_\_

Plot and label the following points.

18. I (8, -4)

19. J (-2, -4)

20. K (-8, 10)

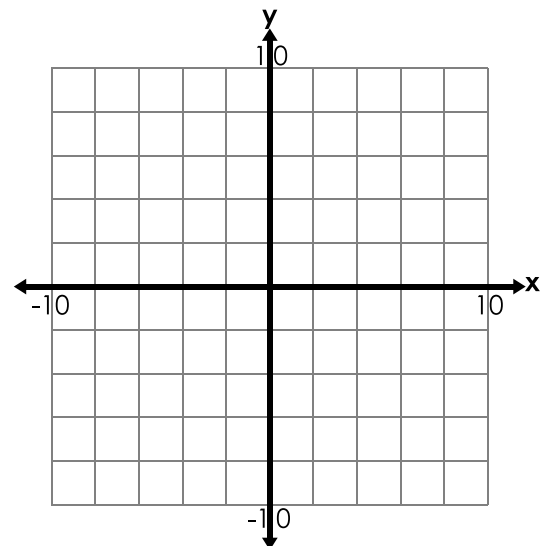
21. L (6, 6)

22. M (-5, -9)

23. N (9, 1)

24. O (-4, 3)

25. P (6, -8)



# ANSWER KEY

## Coordinate Grid

Give the coordinates for the following points.

1. C (2, 2)

2. H (-9, -5)

3. B (-2, 6)

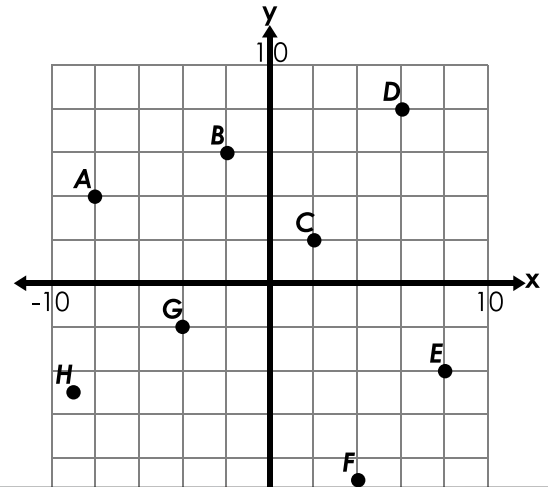
4. E (8, -4)

5. G (-4, -2)

6. D (6, 8)

7. A (-8, 4)

8. F (4, -9)



# Preview

Please log in to download  
the printable version of this worksheet.

